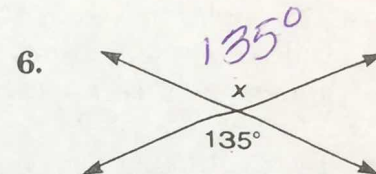
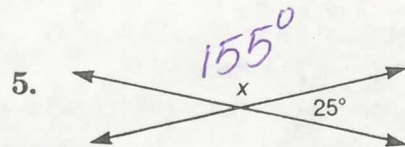
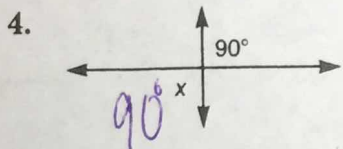
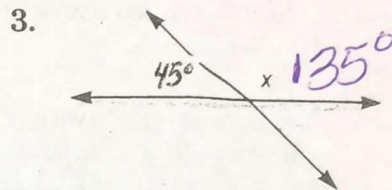
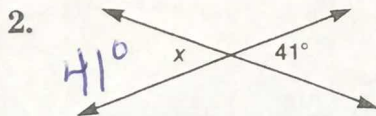
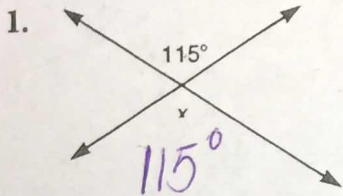


Practice Worksheet 12-3

Angle Relationships

Find the value of x in each figure.



Each of the following pairs of angles is either complementary or supplementary. Find the measure of each angle.

OWN PAPER

