

Worksheet

Rotation of Tasks for Solving Linear Systems

Name _____

Name _____

Name _____

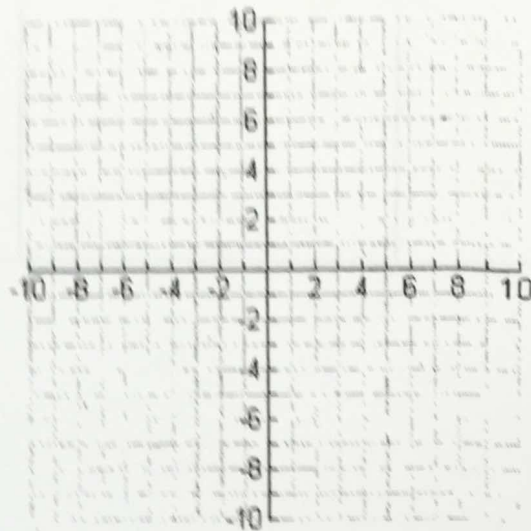
Each person in your group is to solve the three problems by using a different method for each problem. Prepare your answer on your scrap paper. When all members of the group agree on the answer, transfer your answers to the group sheet which will be collected. Sign below each of your answers.

1. $x + y = 8$ and $x - y = 4$

A Solve by substitution

B Solve by add/subtract

C Solve by graphing

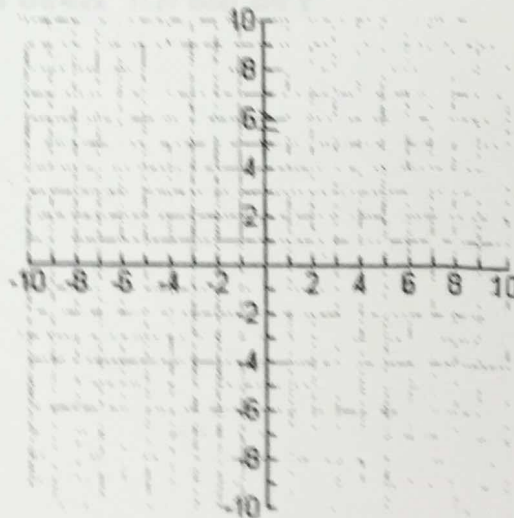


2. $x - 2y = 8$ and $y = -4x + 5$

A Solve by substitution

B Solve by add/subtract

C Solve by graphing

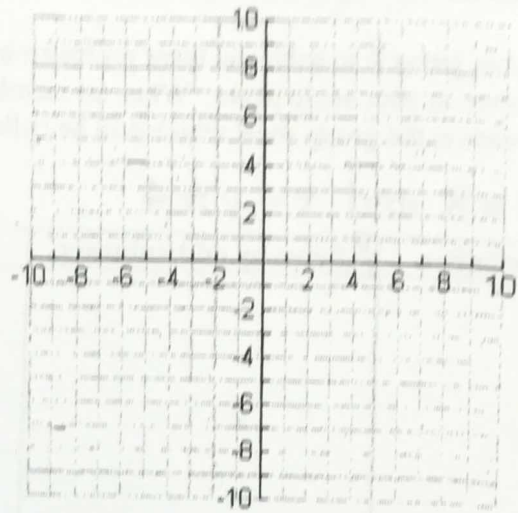


3. $y = -3x - 1$ and $x - 3y = 3$

Solve by substitution

Solve by add/subtract

Solve by graphing



You did it!! Hand this baby in!!